



FAMILY MATH NEWSLETTER

PRIMARY Edition

June 2025: Issue 17



MATH RIDDLE

I am a three-digit number. My tens digit is five more than my ones digit. My hundreds digit is eight less than my tens digit. What number am I?




Game: Make 10 and Add the 10

Get outside and grab a ball or item to toss! Player 1 (P1) starts with the ball and says a number between 1-9. They toss the ball to another player (P2) who has to make 10, starting with the number P1 said (eg. P1 said 4, P2 says 6, $4+6=10$). P2 tosses the ball and to P3 and they say a number between 10 and 19. P3 tosses the ball to the next player (P4) who adds a number to make 20. Play continues until you reach 50 or 100.

Math Talk

WOULD YOU RATHER..



Source: Zorbits/ ClearMath

Problem Solving

There are 3 bicycles and 4 tricycles. How many wheels are there altogether?




Source: adapted from [EQAO Released Questions](#)


Math Talk - Patterning

Read [this story](#) from CBC to learn about Regalia.

What patterns and shapes do you see in the images?



Good Read



Time for Games

Tic-tac-toe, dominoes, and tiddlywinks are fun games to play. This book will show you how!

Source: Mathology

What do you notice?
What do you wonder?



Answer to the riddle: 194